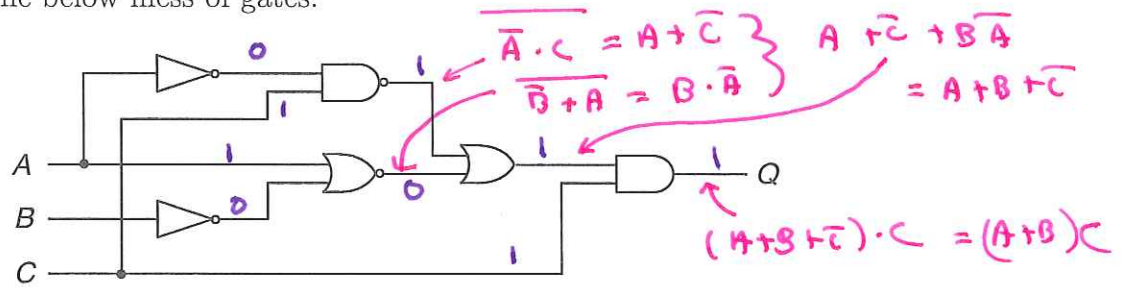


1. Consider the below mess of gates:



- Convert the mess of gates into the equivalent boolean expression.
- Use boolean algebra to reduce your boolean expression.
- Implement your reduced boolean expression in gates.
- On this sheet of paper, label the logic level of each wire for inputs:  $(A, B, C) = (1, 1, 1)$ .

2. Perform the following conversions:

- Convert the decimal number 36 to binary.  $32+4 = 100100$
- Convert the decimal number 35 to octal.  $100011$   
4 3
- Convert the hexadecimal number 34 to binary.  $00110100$
- Convert the hexadecimal number 33 to decimal.  $3 \times 16 + 3 = 51$
- Convert the BCD number 0011,0010 to decimal. 3 2
- Convert the BCD number 0011,0001 to binary.  $31 = 11111$

3. Reduce the following expressions:

(a)  $A + \overline{(A + B \cdot C)} \cdot (\overline{A}C + \overline{D})$  under bar:  $A\overline{A}C + A\overline{D} + \overline{B}C\overline{A}C + \overline{B}C\overline{D}$

(b)  $\overline{AB} + \overline{C} + \overline{AC} + B$  now bar  $\rightarrow D + (\overline{A} \cdot (B+C))$

(c)  $ABC + \overline{A}B\overline{C} + A\overline{B}C + \overline{A}C + A$  =  $A+B+C$

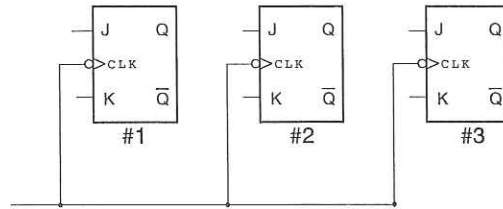
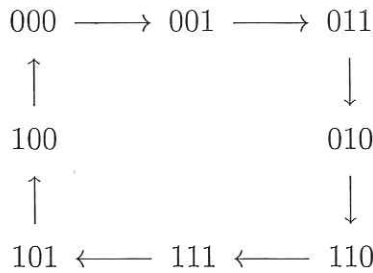
(d)  $(\overline{A} + \overline{B}) \cdot C$  =  $\overline{A}C + A+B+C = A+B+C$

(e)  $A + B\overline{C}$  =  $A+B+C$

(f)  $A + B + C + D$

Median = 92  
Mean = 86  
 $\sigma = 10$

4. The Gray code state diagram of the three binary digits:  $Q_1Q_2Q_3$  is displayed below:



Your job is to design a synchronous circuit built from three edge-triggered JKFFs that follows the above state diagram, where the three binary digits  $Q_1Q_2Q_3$  are the outputs of distinct edge-triggered JKFFs. You will need to determine the gate arrangement needed to make this cycle run, i.e., connecting the outputs of the three JKFFs:  $Q_i$  to the inputs of the three JKFFs:  $J_iK_i$  possibly using the usual (AND, OR,...) gates.

- (a) Begin by considering the possible transitions of a single JKFF. What values of  $JK$  allow a particular transition? Fill in the below table. Hint: in every row either  $J$  or  $K$  will be an  $X$  for “don’t care”.

Transition:	$J$	$K$
$0 \rightarrow 0$	0	X
$0 \rightarrow 1$	1	X
$1 \rightarrow 0$	X	1
$1 \rightarrow 1$	X	0

- (b) Now fill in the below table which displays the desired cycle.

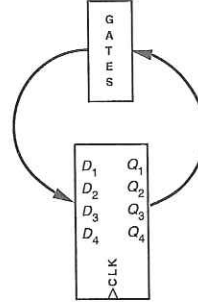
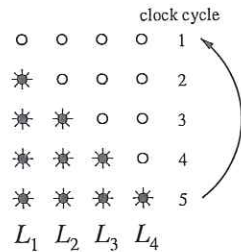
$Q_1$	$Q_2$	$Q_3$	$J_1$	$K_1$	$J_2$	$K_2$	$J_3$	$K_3$
0	0	0	0	X	0	X	1	X
0	0	1	0	X	1	X	X	0
0	1	1	0	X	X	0	X	1
0	1	0	1	X	X	0	0	X
1	1	0	X	0	X	0	1	X
1	1	1	X	0	X	1	X	0
1	0	1	X	0	0	X	X	1
1	0	0	X	1	0	X	0	X

- (c) Gates for  $J_1$ ,  $K_1$ ,  $J_2$ , and  $K_2$  can be fairly easily generated using two input gates and the outputs of the JKFFs. Pick one of the above ( $J_1$ ,  $K_1$ ,  $J_2$ , or  $K_2$ ) and find a simple expression for it in terms of the  $Q_i$  and  $\overline{Q}_i$ . Implement (construct) your expression using simple gates.

$$\begin{aligned}
 J_1 &= Q_2 \cdot \overline{Q}_3 & J_2 &= \overline{Q}_1 \cdot Q_3 \\
 K_1 &= \overline{Q}_2 \cdot \overline{Q}_3 & K_2 &= Q_1 \cdot Q_3
 \end{aligned}$$

5. The rear turn indicators on old Ford Thunderbirds had a distinctive pattern in which the four segments of the indicator were illuminated sequentially, "pointing" the direction of the turn. For example, on a right-turning T-bird you would see the four segments which made up the right-rear indicator cycle as shown below:

T-bird right turn:

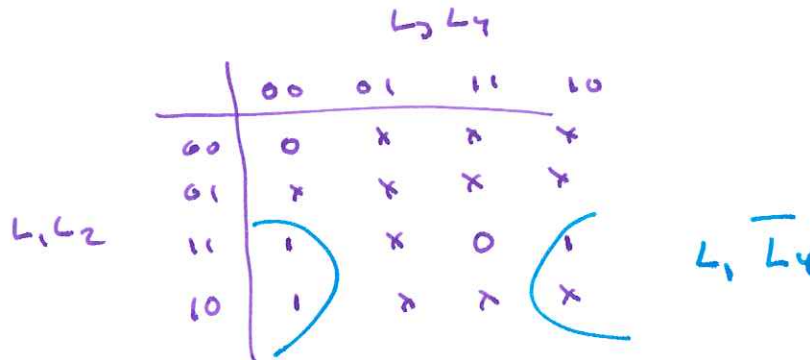


Implement this cycle using four DFFs and external gates ( $Q_i = L_i$ ).

- (a) Draw the state diagram for this process.  
 (b) Display in the below table the desired cycle

$L_1$	$L_2$	$L_3$	$L_4$	$D_1$	$D_2$	$D_3$	$D_4$
0	0	0	0	1	0	0	0
1	0	0	0	1	1	0	0
1	1	0	0	1	1	1	0
1	1	1	0	1	1	1	1
1	1	1	1	0	0	0	0

- (c) Make a Karnaugh map for  $D_2$  in terms of the four logical variables  $L_1, L_2, L_3, L_4$ . Note that there will be *lots* of Xs (don't care) entries. Circle appropriate groups to find a boolean expression for  $D_2$ . Please carefully label your Karnaugh maps so I know what each row and column of the map represents!



6. Consider the below circuit using pair of JKFF. Directly on this sheet appropriately (i.e., correctly given the circuit diagram) label each JKFF “negative edge triggered” or “positive edge triggered”. At the start of this clock sequence  $Q_1$  and  $Q_2$  are both HIGH; controls  $J_1$  and  $K_1$  are changed as shown in the below plot stack and controls  $J_2$  and  $K_2$  are determined by the circuit. Directly on the below stack of output traces record  $Q_1$  (i.e., output of #1 JKFF) and  $Q_2$  for the given “clock in” stream.

